

Name _____ Date _____

Place Value Practice

Directions: Write the place-value position for the following digits in 90,427,516,038.

1. 8

2. 6

3. 4

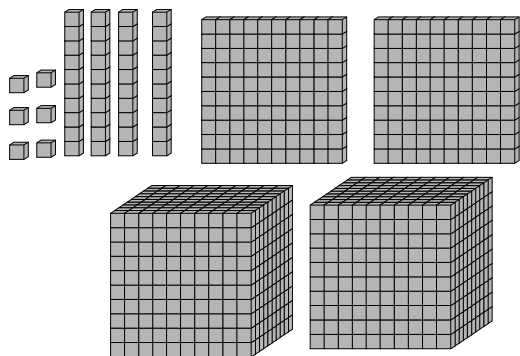
4. 2

5. 9

6. 5


Directions: Write the number of blocks in each set.

7.




_____ blocks

8.



_____ blocks

9.



_____ blocks

Directions: Solve the math problems.

10. $900 + 4 =$

11. $700 + 90 + 2 =$

12. $2000 + 600 + 70 + 3 =$

13. $800 + 30 + 8 =$

14. $9000 + 400 + 1 =$

15. $300 + 30 + 3 =$

16. $500 + 90 + 4 =$

17. $600 + 70 + 7 =$