

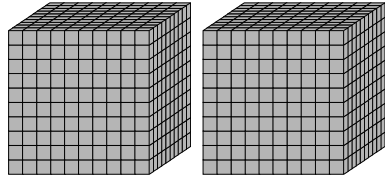
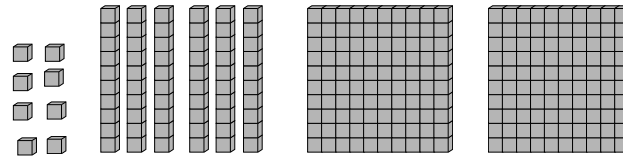
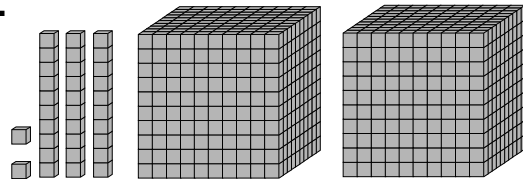
Name \_\_\_\_\_

Date \_\_\_\_\_

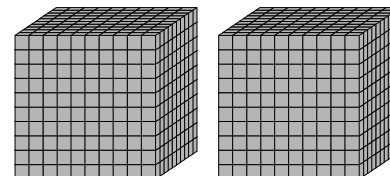
# Place Value Practice

**Directions:** Write the number of blocks in each set. Then solve the math problem.

1.



+



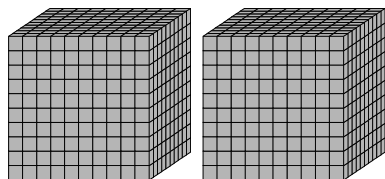
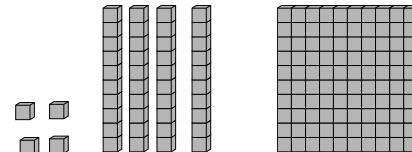
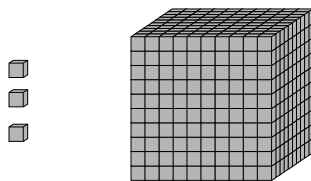
=

\_\_\_\_\_ blocks

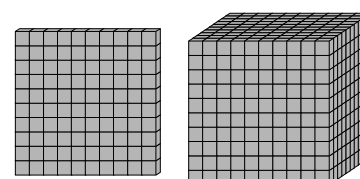
\_\_\_\_\_ blocks

\_\_\_\_\_ blocks

2.



-



=

\_\_\_\_\_ blocks

\_\_\_\_\_ blocks

\_\_\_\_\_ blocks