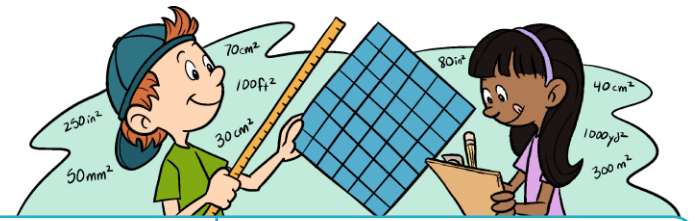



Name _____ Date _____

Area of a Rectangle Practice

Directions: Find the area of the rectangles below.




1




_____ square units

2




_____ square units

3




_____ square units

4




_____ square units

5




_____ square units

6




_____ square units

7



_____ square units

8

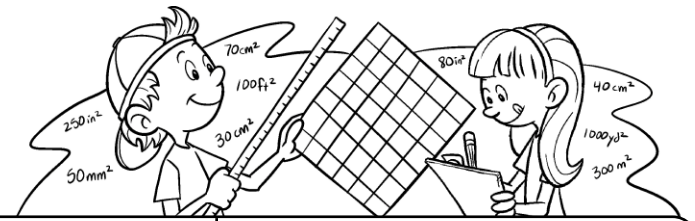


_____ square units


Name _____ Date _____

Area of a Rectangle Practice

Directions: Find the area of the rectangles below.

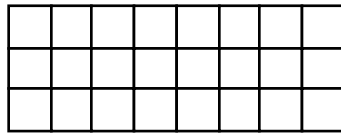


①




_____ square units

②



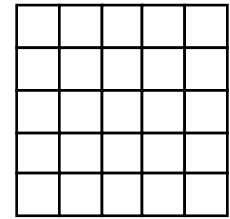
_____ square units

③




_____ square units

④



_____ square units

⑤




_____ square units

⑥




_____ square units

⑦



_____ square units

⑧

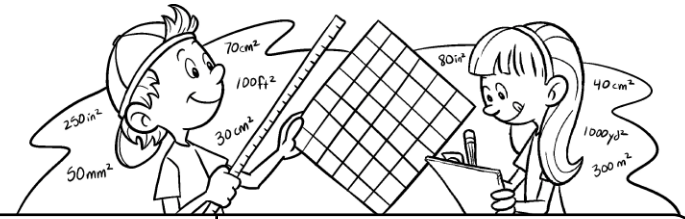


_____ square units


Name _____ **ANSWER KEY** _____ Date _____

Area of a Rectangle Practice

Directions: Find the area of the rectangles below.

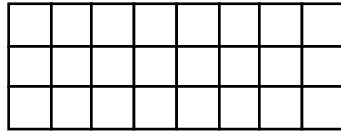


①




48 square units

②




24 square units

③




20 square units

④



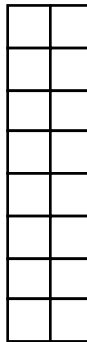
25 square units

⑤




35 square units

⑥




16 square units

⑦



28 square units

⑧



64 square units